


How Many Dinosaurs?

Count the dinosaurs in each group and circle the number that shows how many.



1 2 3 4 5 6




1 2 3 4 5 6




1 2 3 4 5 6




1 2 3 4 5 6




1 2 3 4 5 6



1 2 3 4 5 6



1 2 3 4 5 6




1 2 3 4 5 6

How Many Dinosaurs?

Count the dinosaurs in each group and circle the number that shows how many.



1 2 3 4 5 6




1 2 3 4 5 6




1 2 3 4 5 6



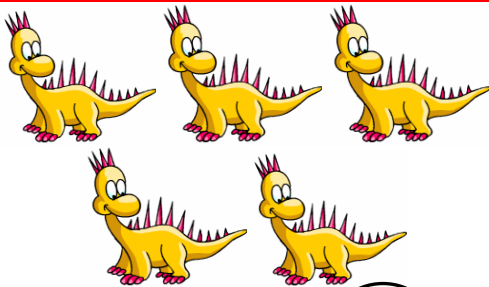
1 2 3 4 5 6




1 2 3 4 5 6



1 2 3 4 5 6



1 2 3 4 5 6



1 2 3 4 5 6